



DIVINE EDUCATION CENTRE
PRE-PRIMARY LEAVING EXAMINATION
2022

INTEGRATED SCIENCE (ITEM 2 of 4)

Time allowed: 2 hours 15 minutes

Random No.						Personal No.		

Candidate's name:

Candidate's Signature:

District No:

--	--	--	--

Read the following instructions carefully:

1. Do not write your **school** or **district name** anywhere on this paper.
2. This paper has two sections **A** and **B**. Section **A** has **40 questions** and **section B** has **15 questions**. This paper has **12 pages** printed altogether.
3. Answer **all** questions. All the working for both sections **A** and **B** must be shown in the spaces provided.
4. **All** working must be done using a **blue** or **black** ball point pen or ink. Any work done in pencil will **NOT** be marked except drawings and diagram.
5. Unnecessary **changes** in your work and handwriting that cannot be easily read may lead to loss of marks.
6. Do not fill anything in the table indicated **“For examiners’ use only”** and the boxes inside the question paper.

FOR EXAMINERS’ USE ONLY		
Qn. No.	MARKS	EXR’S No.
1 - 10		
11 - 20		
21 - 30		
31 - 40		
41 - 43		
44 - 46		
47 - 49		
50 - 52		
53 - 55		
TOTAL		

SECTION A: 40 MARKS

Question **1** to **40** carry one mark each.

1. Name any one example of a stem tuber.

2. How do sea mammals keep themselves warm in water?

3. What name is given to the larva stage of a mosquito?

4. Give any one use of light to people apart from enabling them to see.

5. Identify any one thing that happens to air we breathe in nasal passage.

The diagram below shows a beak of a bird.



6. What does the bird whose beak is shown above feed on?

7. Mention the immunisable skeletal disease.

8. How can we promote proper food digestion?

9. State the importance of the sun in preserving seeds.

10. In which state of matter does sound travel fastest?



11. Apart from radios, mention any other household appliances that use both electricity and magnet.

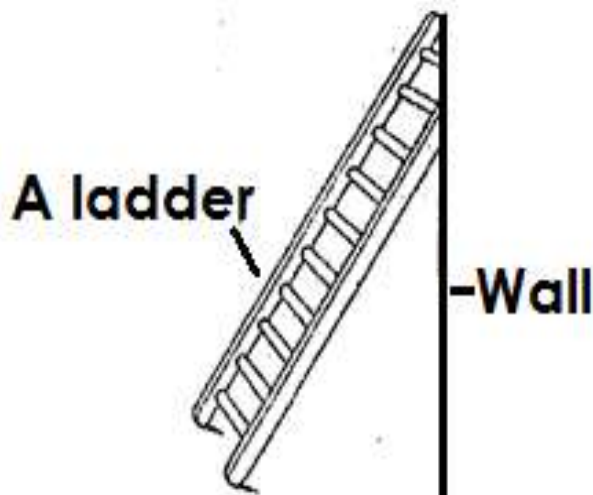
12. How does the human skin control the body temperature?

13. Give any one use of water to plants.

14. Identify one skin disease brought by poor personal hygiene.

15. How does brushing teeth prevent tooth decay?

The diagram below shows a simple machine. Use it to answer questions that follow.



16. Under which group of simple machines do the above belong?

17. Apart from the above example, name any other example of simple machine that is grouped under the same group as the one above.

18. Apart from using bulbs, how else are onions propagated?

19. Write down the immediate help you would give to a person who has been burnt by a hot spoon.

20. What determines the size of the image in a pin hole camera?



21. What state of matter is steam?

22. Name the structures that enable geckoes to move upside down the ceiling.

23. Name the germ that causes polio.

24. State any one disease that affects red blood cells.

25. Which vector spreads typhus fever to people?

26. How are coconut seeds dispersed?

27. In which kind of weather condition do the electric wires sag?


28. Give one example of a vertebrate that uses a shell to protect itself.

29. Name the insect that doesn't lay eggs but produces larva.

30. Which component of air is used by plants to make proteins?



Study the diagram of an electric bulb below and use it to answer question 31.



31. Why is part marked F made of coiled wires?

32. Mention any one example of litter found in poultry House.

33. Of what importance is litter mentioned above in a poultry house?

34. The mass of a stone is 50g. If its volume is 10cc. calculate its density.

35. Of what importance are the bright feathers to a hen?

36. State any one reason why handles of umbrella are made of plastic or rubber.

37. What happens when pollen grains land on the stigma?

38. Name one breed of cattle reared in Uganda.

39. Apart from killing germs, identify any other use of hydrochloric acid during digestion.

40. What scientific name is given to the smallest particles that make up matter?



SECTION B

41. a. What is environmental degradation?

b) Give any three artificial causes of environmental degradation.

(i) _____

(ii) _____

(iii) _____

42. a) What name is given to animals with back bones?

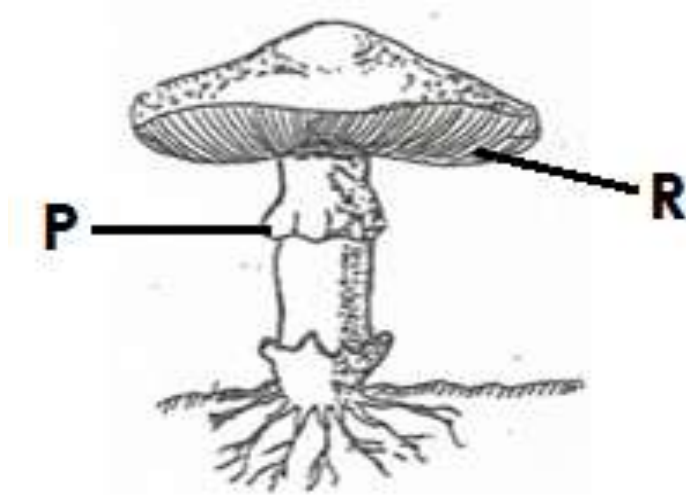
b) Mention any two groups to animals with back bones.

(i) _____

(ii) _____

c) Why is a duck billed platypus referred to as a mammal yet it lays eggs?

43. The diagram below shows fungi. Use it to answer questions that follow.



a) Name part marked **P**

b) How does the above fungi reproduce?

c) State the function of part marked R.



44.a) What specific name is given to the vertical arrangement of soil layers?

b) Write down any three activities that destroy the soil.

(i) _____

(ii) _____

(iii) _____

45.a) Why should an ordinary pit latrine be smoked regularly?

b) Give any two indicators of poor sanitation in a home.

(i) _____

(ii) _____

c) Write **ECOSAN** in full.

46.a) Name the weather instrument used to measure the amount of rainfall received in an area.

b.) Give reason why people are advised to,

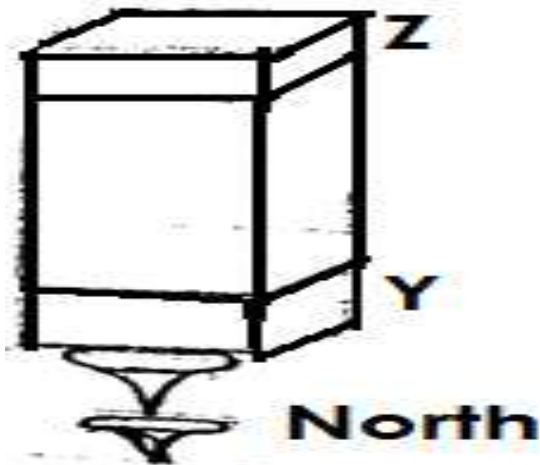
(i) Put the instrument named in (a) above in an open ground when using it.

(ii) Raise the instrument 30cm above the ground when using it

c) What is the importance of a ceilometer as a weather instrument?



47. **The diagram below shows a method of marking a magnet. Use it to answer questions that follow.**



a) Name the method shown above.

b) What name is given to the magnet made by using the method named in (a) above.

c) Give any one way in which a magnet can be used in a kitchen.

d) Name the pole marked Y.

48. Match the following items in A with those in B correctly

List A

Nuclear electricity

Geothermal electricity

Thermal electricity

Hydro electricity

List B

fast flowing water.

burning fuels.

hot rocks in the earth.

produced from uranium

a) Nuclear electricity _____

b) Geothermal electricity _____

c) Thermal electricity _____

d) Hydro electricity _____

49.a) State two roles played by the ovaries during reproduction.

(i) _____

(ii) _____

b) What name is given to the hormone in male animals that determines the secondary sex characteristics.

c) Give one way of safe guarding against teenage pregnancy among girls below the age of 18.



50.a) Suggest two ways in which people in your locality use heat.

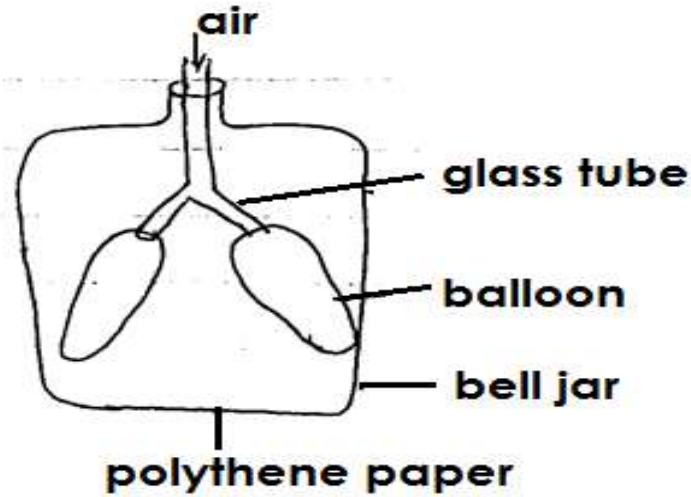
(i) _____

(ii) _____

b) Suggest a reason why the inner walls of a solar drier are painted black.

c) How does heat help to speed up the drying of wet clothes?

51. The diagram below shows the way in which one of the systems of the human body works. Use it to answer the questions that follow.



a) Name the system.

b) What does a balloon represents?

c) What does a polythene paper represent?

d) What would happen to the polythene if air is removed from the balloon?

52.a)How does each of the following animals protect itself against its enemies?

a) Chameleon

b) Porcupine

c) Skunk

d) Scorpion



53. Study the table below and answer the questions that follow.

List A	List B
Hen	Seals
Dove	Whale
Duck	Porpoise
Turkey	Dugongs

a) To which class of animals do those in B belong?

b) In which way are animals in list A similar to those in B

c) Apart from those in list B. Give any other animal that fits in the list.

d) State the characteristic which is common in animals in both list A and list B.

54. Give one example of the following types of joints

(i)Hinge joint

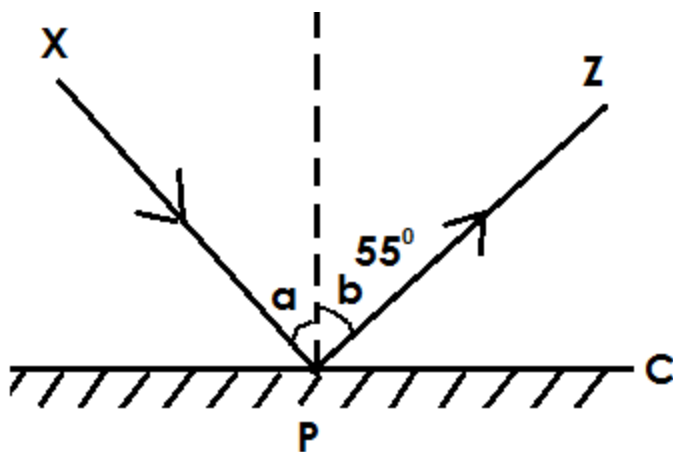
(ii)Ball and socket joint

b) Mention the structure that joins a bone to a bone.

c) Name the longest and strongest bone in human body.



55. The diagram shows a ray of light striking a smooth surface. Study it and use it to answer questions that follow.



a) Name any one example of a material that can be used at material C

b) What is the size of angle a

c) Name the following rays

(i) XP _____

(ii) PZ _____

END

